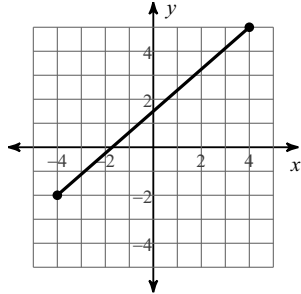


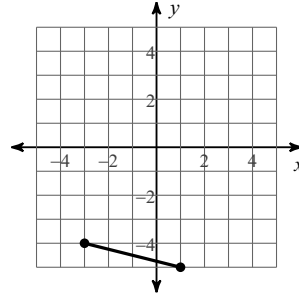
Distance Formula

Find the distance between each pair of points. Round your answer to the nearest tenth, if necessary.

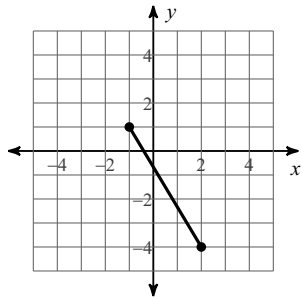
1)



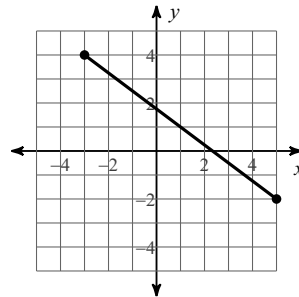
2)



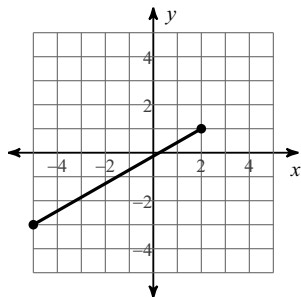
3)



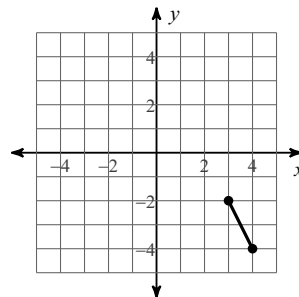
4)



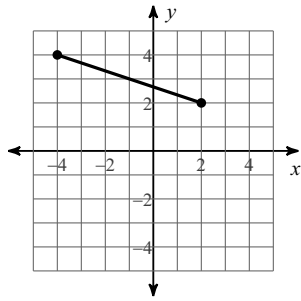
5)



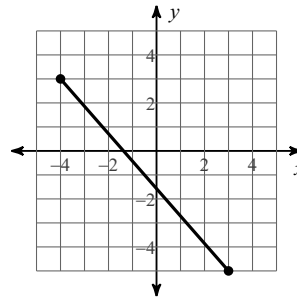
6)



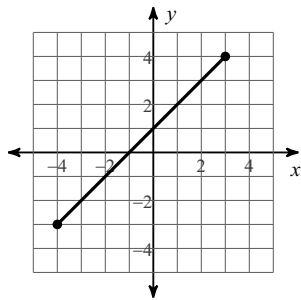
7)



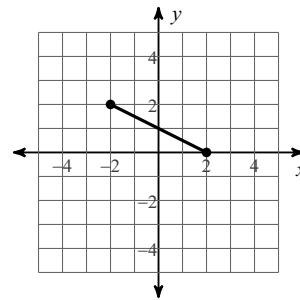
8)



9)



10)



11) $(-9, 5), (7, 4)$

12) $(-1, 9), (6, 8)$

13) $(-5, 9), (-5, 10)$

14) $(8, 0), (2, 9)$

15) $(-9, -7), (5, 4)$

16) $(1, 6), (7, -10)$

Answers to Distance Formula

1) 10.6

5) 8.1

9) 9.9

13) 1

2) 4.1

6) 2.2

10) 4.5

14) 10.8

3) 5.8

7) 6.3

11) 16

15) 17.8

4) 10

8) 10.6

12) 7.1

16) 17.1