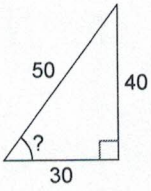


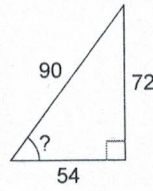
Using Trig to Find Angle Measures

Find the measure of the indicated angle to the nearest tenth of a degree.

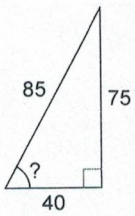
1)



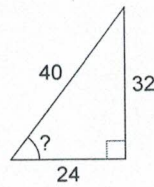
2)



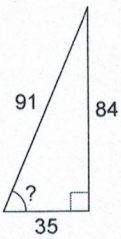
3)



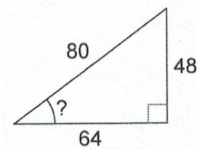
4)



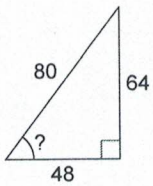
5)



6)



7)



8)

